

VI Semester B.C.A. Examination, May/June 2018
 (CBCS) (F +R)
 (2016 – 17 & Onwards)
 COMPUTER SCIENCE
 BCA 601 : Theory of Computation

Time : 3 Hours

Max. Marks : 100

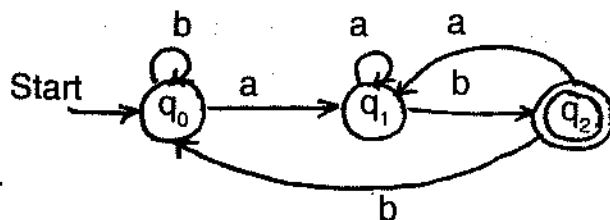
Instruction : Answer all Sections.

SECTION – A

Answer any ten questions. Each question carries two marks.

(10x2=20)

1. What is finite automata ? Explain with block diagram.
2. What is trap state ? Explain with a simple example.
3. What are the moves made by the following DFA while processing the string abaab ? Find if the string is accepted or rejected by DFA.



4. Design a regular expression over $\Sigma = \{a, b\}$ for the language accepting string of exactly length 2.
5. State pumping Lemma for regular languages.
6. State Arden's theorem.
7. Define grammar. Give one example.

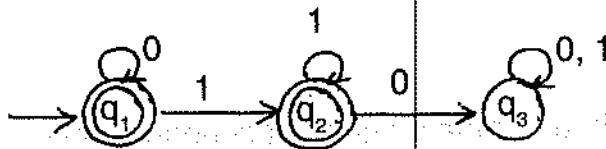


8. Mention any two applications of context free grammar.
9. Define Nullable variable.
10. Define GNF.
11. Define turing machine.
12. Define recursively enumerable language.

SECTION – B

Answer any five questions. Each question carries five marks. (5×5=25)

13. Construct a DFA to accept string of 0's and 1's representing zero modulo five.
14. Define NFA. Obtain a NFA to accept the language $L = \{w/w \in abab^n \text{ or } aba^n \text{ where } n \geq 0\}$.
15. Using pumping Lemma prove the language $L = \{yy/y \in (0.1)^*\}$ is not regular.
16. Convert the DFA to Regular Expression.



17. Define context free grammar.

Consider a grammar $G = (V, T, P, S)$ where $V = \{S\}$ $T = \{a, b\}$ $S = SP = \{S \rightarrow aS|b\}$.

Find the language accepted by G.

18. Explain Chomsky hierarchy of grammar.



19. Eliminate useless symbols from the following grammar.

$S \rightarrow aAa$

$A \rightarrow Sb$

$A \rightarrow bcc$

$A \rightarrow DaA$

$C \rightarrow abb$

$C \rightarrow DD$

$E \rightarrow ac$

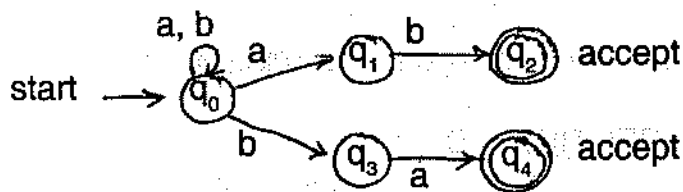
$D \rightarrow aDa$

20. What are the different types of turing machine ?

SECTION - C

Answer any three questions. Each question carries fifteen marks. (15x3=45)

21. Convert the following NFA to DFA using lazy evaluation method.



22. Minimize the following DFA using table filling algorithm.

δ	a	b
A	B	C
B	G	C
*C	A	C
D	C	G
E	H	F
F	C	G
G	G	E
H	G	C

LIBRARY
 Surana College
 No. 16, South End Road,
 BANGALORE - 560 004



23. Define pushdown automata. Obtain a PDA to accept the language $L = \{a^n b^n | n \geq 1\}$.
24. a) Obtain a grammar to generate string consisting of any number of a's and b's with atleast one a or atleast one b. (5+5+5)
- b) For the following production

$$S \rightarrow AB$$

$$A \rightarrow aaA | \epsilon$$

$$B \rightarrow Bb | \epsilon$$

Write the left most and right most derivation for the string aab.

- c) For the grammar G with production rules

$$E \rightarrow E + E$$

$$E \rightarrow E * E$$

$$E \rightarrow id$$

Where $V = \{E\}$ $T = \{id\}$ $S = \{E\}$, obtain the right most derivation and the parse tree for the string $W = id + id * id$.

25. Obtain a turing machine to accept the language $L = \{a^n b^n | n \geq 1\}$.

SECTION – D

Answer **any one** question.

(10×1=10)

26. Convert the RE $(a + b)^* abb$ to DFA.
27. Write short notes on halting problem of turing machine and post correspondence problem.
-